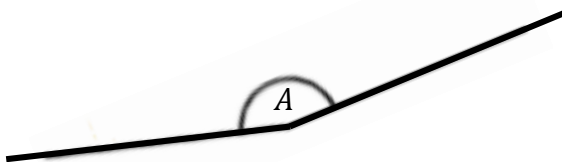
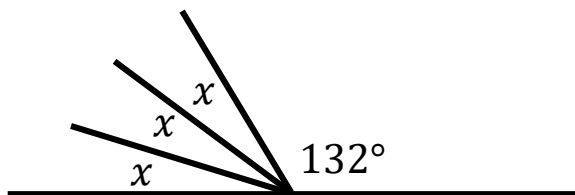


1. What type of angle is angle A.



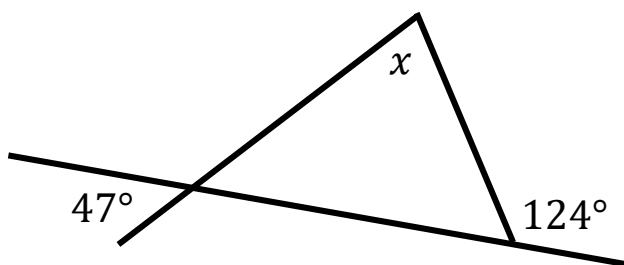
.....
(1 mark)

2. Calculate x .



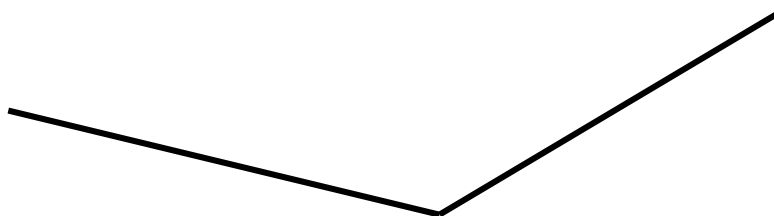
$x =$
(1 mark)

3. Calculate x .



$x =$
(1 mark)

4. Measure this angle using a protractor.



.....
(1 mark)

5. Using a protractor, draw a 220° angle

(2 marks)

6. Here is a parallelogram.

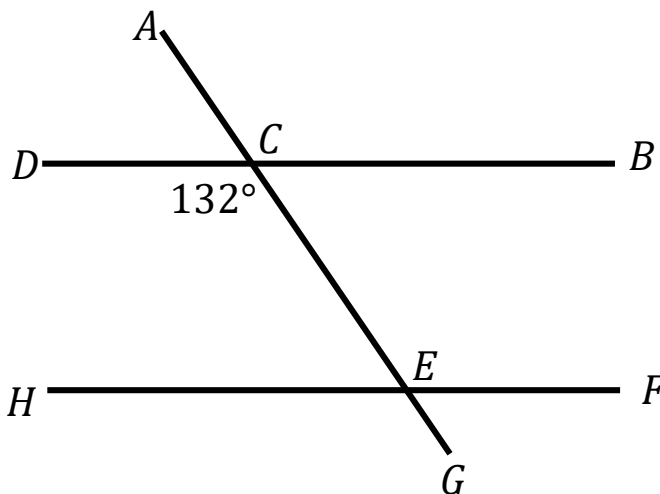
Calculate x .



$x = \dots\dots\dots$
(1 mark)

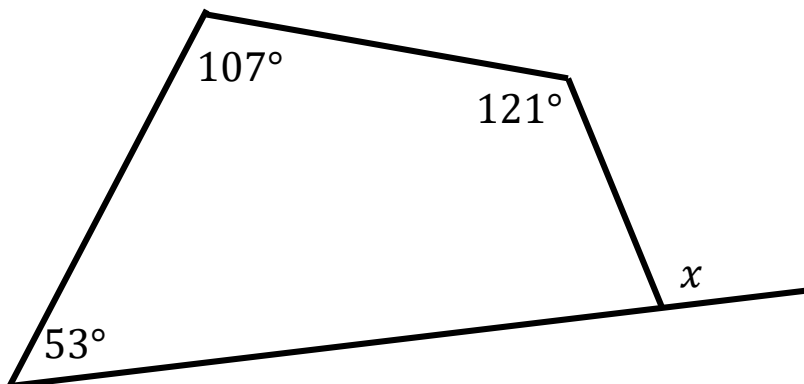
7. Calculate HEG .

You must give reasons for your answer



(3 marks)

8. Calculate x .



$x = \dots\dots\dots$
(2 marks)

Score =